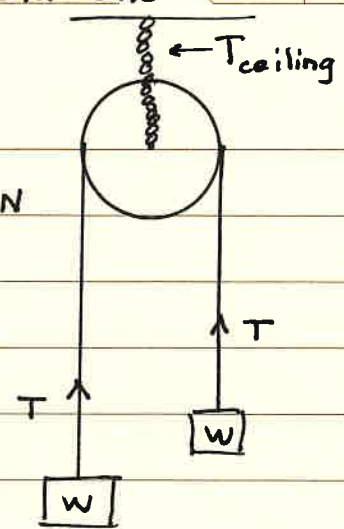


Chapter 5 In-Class Homework Solutions

Ex. 1

Two 25.0 N weights are suspended

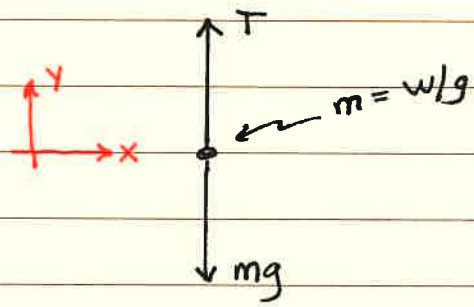


a.)

$T = ?$

$w = mg = 25 \text{ N}$

Pick one of the weights as the system



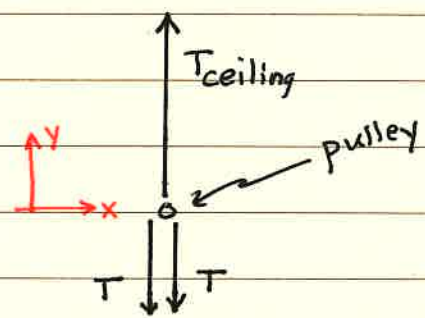
$\sum F_y = 0$ because $v = \text{constant}$

$T - mg = 0 \quad \boxed{T = mg = w = 25.0 \text{ N}}$

b.)

$T_{\text{ceiling}} = ?$

Pick the "massless" pulley as the system



$\sum F_y = 0 \quad T_{\text{ceiling}} - T - T = 0$

$\boxed{T_{\text{ceiling}} = 2T = 50.0 \text{ N}}$

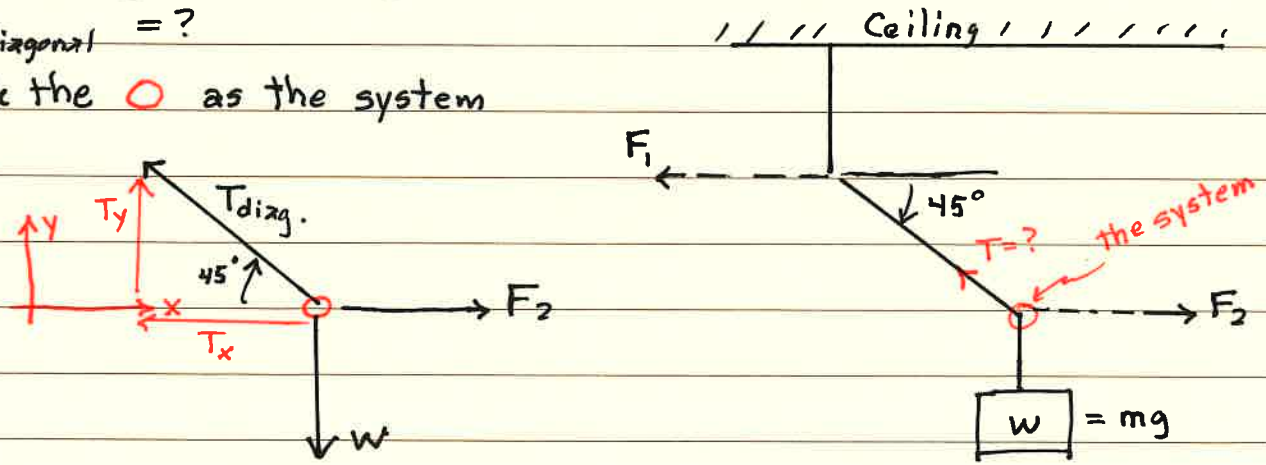
Ex. 8

In the figure, the weight $w = 60.0 \text{ N}$

a.)

$T_{\text{diagonal}} = ?$

Pick the \circ as the system



Chapter 5 In-Class Homework Solutions

Ex. 8 cont'd $\sum F_y = 0 \Rightarrow T_y - w = 0 \quad T \sin 45^\circ = w$

$$T = \frac{w}{\sin 45^\circ} = \sqrt{2} (60.0 \text{ N}) = 84.9 \text{ N}$$

b.) Find F_1 and F_2

$$\sum F_x = 0 \Rightarrow F_2 - T_x = 0 \quad F_2 - T \cos 45^\circ = 0$$

$$F_2 = T \cos 45^\circ \quad F_2 = \left(\frac{w}{\sin 45^\circ} \right) \cos 45^\circ \quad F_2 = \frac{w}{\tan 45^\circ} = w$$

$$F_2 = w = 60.0 \text{ N}$$

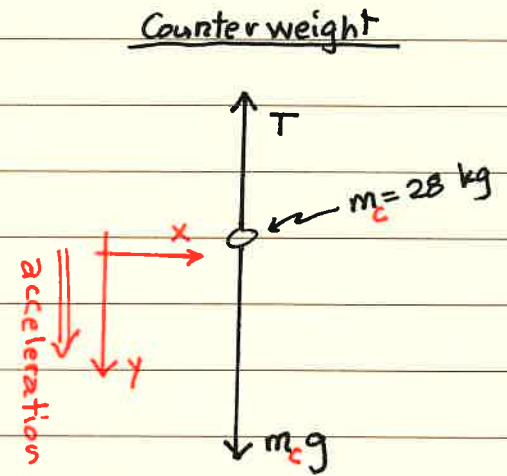
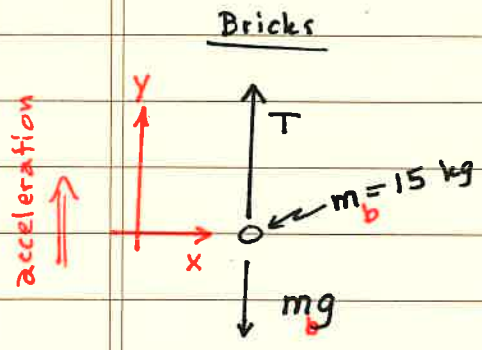
F_1 must equal F_2 such that the diagonal part of the string does not accelerate in the x-direction. $\sum F_x = 0$

$$-F_1 + F_2 = 0 \quad \text{Therefore, } F_1 = F_2 = 60.0 \text{ N}$$

Ex. 15

Atwood's Machine

a.) Draw two free-body diagrams



b.) acceleration = ?

Bricks: $\sum F_y = m_b a \quad T - m_b g = m_b a$

$$T = m_b (g + a)$$

Counterweight: $\sum F_y = m_c a \quad m_c g - T = m_c a$

$$T = m_c (g - a)$$

$$T = T$$

$$m_b g + m_b a = m_c g - m_c a \quad (m_b + m_c) a = (m_c - m_b) g$$

$$a = \frac{(m_c - m_b)}{(m_b + m_c)} g = \frac{28 - 15}{28 + 15} (9.8 \text{ m/s}^2) \quad a = 2.96 \text{ m/s}^2$$

Chapter 5 In-Class Homework Solutions

DATE	
TOPIC	(3)

Ex. 15 Cont'd

c.) $T = ?$ in the rope. Use either equation for T .

$$T = m_b(g + a) = 15 \text{ kg} (9.8 + 2.96) \text{ m/s}^2 \quad T = 191.4 \text{ N}$$

$$T = m_c(g - a) = 28 \text{ kg} (9.8 - 2.96) \text{ m/s}^2 \quad T = 191.4 \text{ N}$$

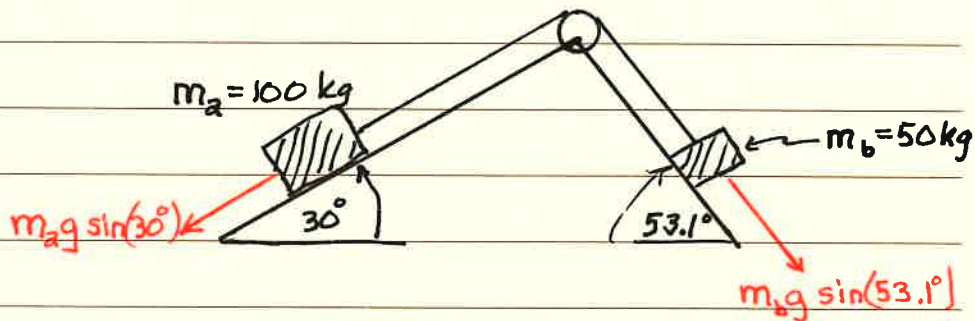
$$W_{\text{bricks}} = m_b g = 15 \text{ kg} (9.8 \text{ m/s}^2) = 147 \text{ N} \quad \leftarrow T = 191.4 \text{ N}$$

$$W_{\text{counterweight}} = m_c g = 28 \text{ kg} (9.8 \text{ m/s}^2) = 274 \text{ N}$$

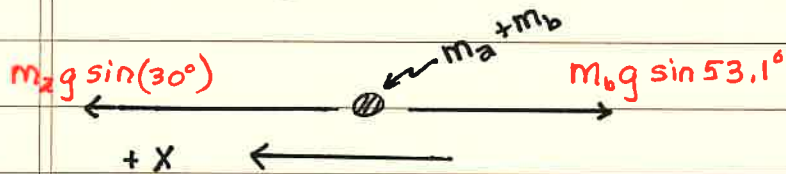
Prob. 90

Two blocks connected by a massless cord passing over a small ...

a.) Which way will the system move?



Free-Body Diagram



\leftarrow assume accel. in this direction, and see if it is correct.
 \leftarrow mass of the system

$$\sum F_x = m a_x \quad + m_2 g \frac{1}{2} - m_1 g \frac{4}{5} = (m_2 + m_1) a_x$$

$$+ 50g - 40g = 150 a_x \quad a_x = \frac{10 \text{ kg} (9.8 \text{ m/s}^2)}{150 \text{ kg}} = 0.653 \frac{\text{m}}{\text{s}^2}$$

$$\boxed{a_x = 0.563 \text{ m/s}^2}$$

a.) Yes! The system accelerates from "right to left."

b.) $a_x = 0.653 \text{ m/s}^2$

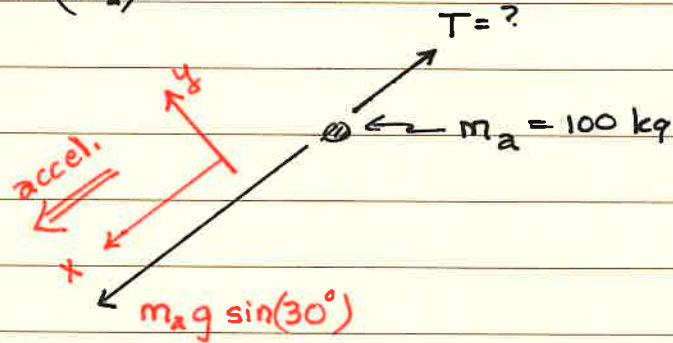
c.) $T = ?$ Draw a free-body diagram for one of the blocks.

Chapter 5 In-Class Homework Solutions

DATE	
TOPIC	4

Prob. 90 cont'd

Free-Body Diagram (m_a)



$$\sum F_x = m_a a_x$$

$$m_a g \sin(30^\circ) - T = m_a a_x \quad T = m_a (g \sin(30^\circ) - a_x)$$

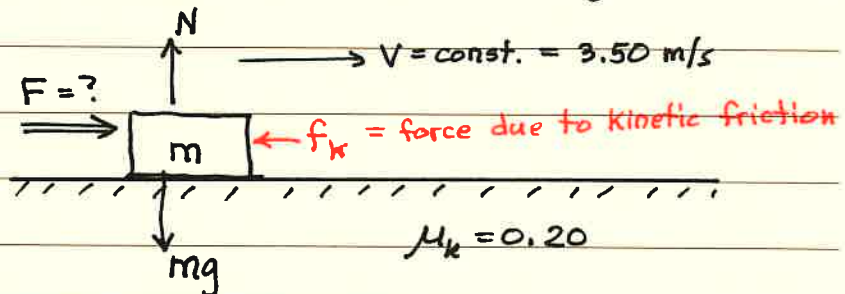
$$T = 100 \text{ kg} \left(9.8 \text{ m/s}^2 \left(\frac{1}{2} \right) - 0.653 \text{ m/s}^2 \right) = \boxed{424.7 \text{ N}}$$

Ex. 25

A stockroom worker pushes a box with mass 16.8 kg

$$m = 16.8 \text{ kg}$$

a.) $F = ?$



$$\sum F_y = 0$$

$$N - mg = 0 \quad \boxed{N = mg}$$

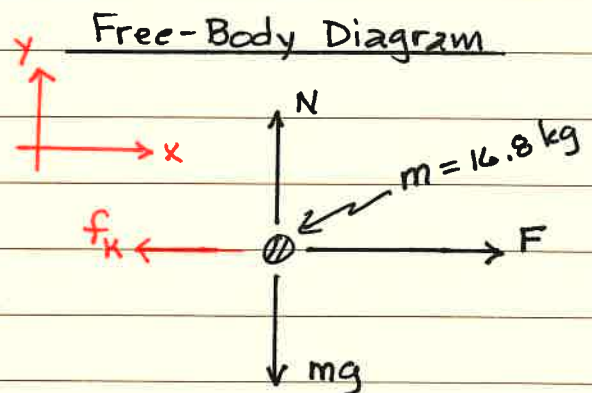
$$\sum F_x = 0 \quad \leftarrow \text{No acceleration}$$

$$F - f_k = 0 \quad F - \mu_k N = 0$$

$$F - \mu_k (mg) = 0$$

$$F = \mu_k mg = 0.20 (16.8 \text{ kg}) 9.8 \text{ m/s}^2$$

$$\boxed{F = 32.9 \text{ N}}$$



Chapter 5 In-Class Homework Solutions

Ex. 25 cont'd.

b.) How far does the block slide if the force is removed?

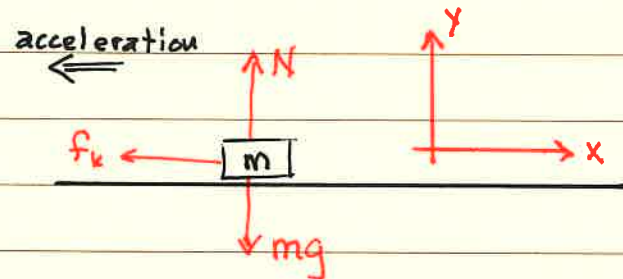
Free-Body Diagram

$$\Sigma F_x = ma_x$$

$$-f_k = ma_x$$

$$a_x = \frac{-f_k}{m} = \frac{-\mu_k mg}{m}$$

$$a_x = -\mu_k g = -0.20(9.8 \text{ m/s}^2)$$



$$a_x = -1.96 \text{ m/s}^2$$

$$v_0 = 3.50 \text{ m/s}$$

$$v = 0.00 \text{ m/s}$$

$$x = ?$$

Eq. 4

$$v^2 = v_0^2 + 2a_x x$$

$$x = \frac{v^2 - v_0^2}{2a_x}$$

$$x = \frac{(0.00^2 - (3.50)^2) \text{ m}^2/\text{s}^2}{2(-1.96 \text{ m/s}^2)}$$

$$x = 3.125 \text{ meters}$$

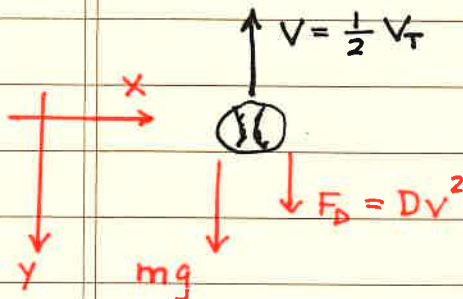
Ex. 40

You throw a baseball straight up. $F_D \sim v^2$ $F_D = Dv^2$
terminal velocity

a.) Moving upward

$$v_T = \sqrt{mg/D}$$

If $v = \frac{1}{2} v_T$ $a_y = ?$



$$\Sigma F_y = ma_y$$

$$mg + Dv^2 = ma_y$$

$$mg + D\left(\frac{1}{2} v_T\right)^2 = ma_y$$

$$mg + D\left(\frac{1}{4} \frac{mg}{D}\right) = ma_y$$

$$a_y = g + \frac{1}{4} g$$

downward

$$a_y = \frac{5}{4} g$$

Chapter 5 In-Class Homework Solutions

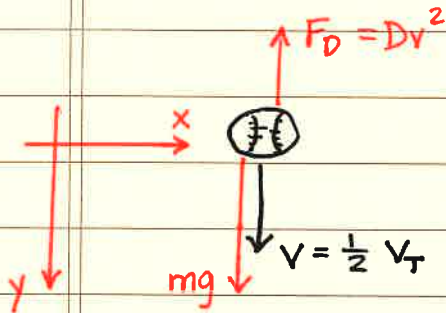
DATE	
TOPIC	6

Ex. 40 cont'd

b.) Moving downward

recall: $v_T = \sqrt{mg/D}$

$a_y = ?$



$$\begin{aligned} \Sigma F_y &= ma_y \\ mg - Dv^2 &= ma_y \\ mg - D\left(\frac{1}{2}v_T\right)^2 &= ma_y \\ mg - D\left(\frac{1}{4}\frac{mg}{D}\right) &= ma_y \end{aligned}$$

$a_y = g - \frac{1}{4}g$

$a_y = \frac{3}{4}g$

downward

Ex. 53

Rotating Space Stations. One problem for humans living

$R = 400 \text{ m}$

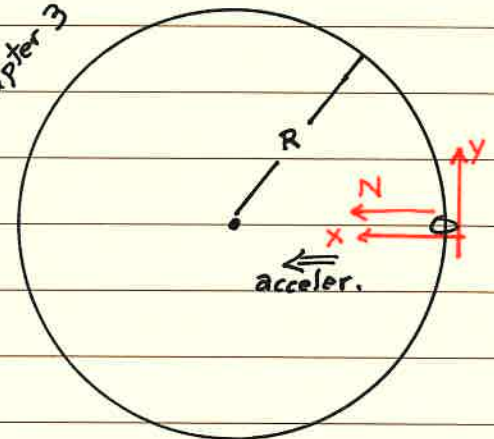
a.) $N = mg$

to produce your earthly weight

$\Sigma F_x = ma_x \Rightarrow N = m\left(\frac{v^2}{R}\right)$

see chapter 3

$mg = m\left(\frac{4\pi^2 R}{T^2}\right)$



$\text{rpm} = \frac{\text{rev}}{\text{min}} = \frac{1}{T(\text{minutes})} = ?$

$\frac{1}{T^2} = \frac{g}{4\pi^2 R} \quad \frac{1}{T} = \frac{1}{2\pi} \sqrt{\frac{g}{R}} = \frac{1}{2\pi} \sqrt{\frac{9.8 \text{ m/s}^2}{400 \text{ m}}} = 0.0249 \text{ sec}$

$\frac{1}{T} = 0.0249 \frac{\text{rev}}{\text{sec}} \left(\frac{60 \text{ s}}{\text{min}}\right) = 1.49 \frac{\text{rev}}{\text{min}} \quad \frac{1}{T} = 1.49 \text{ rpm}$

b.) $N = mg_{\text{mars}} \quad \frac{1}{T} = \frac{1}{2\pi} \sqrt{\frac{3.70 \text{ m/s}^2}{400 \text{ m}}} \left(\frac{60 \text{ s}}{\text{min}}\right) \Rightarrow \frac{1}{T} = 0.918 \frac{\text{rev}}{\text{min}}$

Chapter 5 In-Class Homework Solutions

Example: A car is traveling at 20 m/s on ground level and begins

$$R = 70 \text{ m}$$

$$\mu_s = ?$$

$$f_s^{\max} = \mu_s^{\min} N$$

normal force

$$\Sigma F_y = 0 \Rightarrow N - mg = 0$$

$$N = mg$$

$$\Sigma F_x = m a_x = m \left(\frac{v^2}{R} \right)$$

a_{rad}

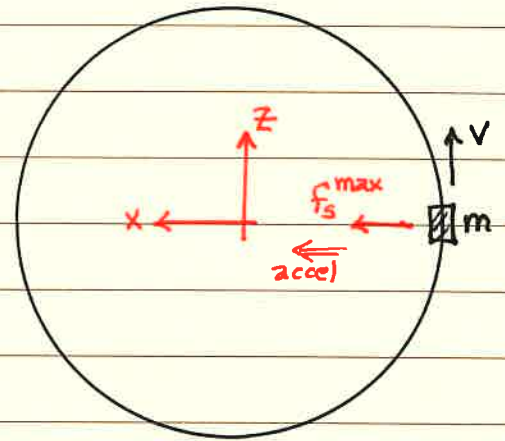
$$f_s^{\max} = \frac{mv^2}{R}$$

$$\mu_s N = \mu_s (mg) = \frac{mv^2}{R}$$

$$\mu_s^{\min} = \frac{v^2}{gR} = \frac{(20 \text{ m/s})^2}{9.8 \frac{\text{m}}{\text{s}^2} (70 \text{ m})}$$

$$\mu_s^{\min} = 0.583$$

Top View



Ground Level

